

ROUGH WORK

SEAL

**Direction (Questions 109 to 111) :** In the following questions, an idiomatic expression/a proverb has been given, followed by some alternatives. Choose the one which best expresses the meaning of the given idiom/proverb

109. To be at loggerheads  
 1. To have tough encounter  
 2. To be at enmity or strife  
 3. To face stiff opposition  
 4. To tax one's mind and body
110. To wash one's dirty linen in public  
 1. To criticise one's nature in public  
 2. To quarrel in the open  
 3. To do some ugly work in public  
 4. To discuss dirty and scandalous matters of personal nature in the presence of strangers
111. To put somebody in his place  
 1. To turn him out  
 2. To honour him  
 3. To give him due respect  
 4. To make him humble

**Direction (Questions 112 to 114) :** In the following questions, find out which one of the words given below the sentence can most appropriately replace the group of words italicised in the sentence

112. He is very careful and particular about everything he does  
 1. precise                      2. scrupulous  
 3. meticulous                4. conscientious
113. The officer was not willing to take a definite stand on that point  
 1. vague                        2. evasive  
 3. ambiguous                 4. complex
114. The advertisement assured the public that the medicine would give back to the users, their youthful *vigour* and appearance  
 1. rejuvenate                 2. restore  
 3. replenish                    4. render

**Direction (Questions 115 to 120) :** Read the following passages carefully and answer the questions that follow

#### PASSAGE 1

Books are, by far, the most lasting product of human effort. Temples crumble into ruin, pictures and statues decay, but books survive. Time does not destroy the great thoughts which are as fresh today as when they first passed through their author's mind. These thoughts speak to us through

the printed page. The only effect of time has been to throw out of currency the bad products. Nothing in literature which is not good can live for long. Good books have always helped man in various spheres of life. No wonder that the world keeps its books with great care

115. Of the products of human effort, books are the most  
 1. enjoyable                      2. useful  
 3. permanent                    4. important
116. Time does not destroy books because they contain  
 1. high ideals  
 2. great ideas  
 3. useful material  
 4. subject-matter for education
117. "To throw out of currency" means  
 1. extinguish                    2. forget  
 3. destroy                        4. put out of use

#### PASSAGE 2

Speech is a great blessing but it can also be a great curse, for while it helps us to make our intentions and desires known to our fellows, it can also, if we use it carelessly, make our attitude completely misunderstood. A slip of the tongue, the use of an unusual word, or of an ambiguous word, and so on, may create an enemy where we had hoped to win a friend. Again, different classes of people use different vocabularies, and the ordinary speech of an educated man may strike an uneducated listener as pompous. Unwittingly, we may use a word which bears a different meaning to our listener from what it does to men of our own class. Thus speech is not a gift to use lightly without thought, but one which demands careful handling. Only a fool will express himself alike to all kinds and conditions of men

118. Speech can be a curse, because it can  
 1. reveal our intentions  
 2. lead to carelessness  
 3. hurt others  
 4. create misunderstanding
119. The best way to win a friend is to avoid \_\_\_\_\_ in speech  
 1. ambiguity                    2. verbosity  
 3. pomposity                    4. irony
120. While talking to an uneducated person, we should use  
 1. polite language  
 2. ordinary speech  
 3. his vocabulary  
 4. simple words



81. The union government of India on 1 February 2012 gave the approval for setting up a National Council for Senior Citizens. Who amongst the following will head this council ?
1. Minister of External Affairs
  2. Minister of Social Justice and Empowerment
  3. Minister of Home
  4. Minister of Finance
82. On which day every year National Awards for Teachers are announced ?
1. November 14
  2. November 19
  3. August 15
  4. September 5
83. Rajiv Gandhi Khel Ratna Award 2012 was jointly given to
1. Vijay Kumar (Shooting) and Yogeshwar Dutt (Wrestling)
  2. Yuvraj Singh (Cricket) and Gagan Narang (Shooting)
  3. Geeta Phogat (Wrestling) and Narsingh Yadav (Wrestling)
  4. Ashwani Ponnappa (Badminton) and Mary Kom (Boxing)
84. India won the Under-19 Cricket World Cup, 2012 after defeating which of the following countries in the final ?
1. Australia
  2. England
  3. South Africa
  4. Pakistan
85. Justice Markandey Katju has recently been appointed as the Chairman of
1. Planning Commission
  2. Press Council of India
  3. National Human Right Commission
  4. Minority Commission
86. Aamir Khan has been appointed as the national brand ambassador of UNICEF to promote
1. child nutrition
  2. handwashing and personal hygiene
  3. sanitation
  4. none of these
87. Who is the current Chairperson of the Children's Film Society of India ?
1. Nandita Das
  2. Leela Samson
  3. Shabana Azmi
  4. Amol Gupte
88. 'International Literacy Day' September 8, 1965 was proclaimed by which of the following ?
1. WHO
  2. Virginia Literacy Foundation
  3. UNESCO
  4. Feed The Minds
89. "Indian Wins Freedom" is written by
1. Mahatma Gandhi
  2. Maulana Abul Kalam Azad
  3. Jawaharlal Nehru
  4. Vishnu Sharma
90. India's flag-bearer at the opening ceremony of the 2012 London Olympic Games was
1. Sushil Kumar
  2. Gagan Narang
  3. Leander Paes
  4. Saina Nehwal

### GENERAL ENGLISH

Direction (Questions 91 to 93) : In the following questions, a part of sentence is printed in italics. Below each sentence, some phrases are given which can substitute the italicised part of the sentence. Find out the phrase which can correctly substitute that part of the sentence. If the sentence is correct as it is, the answer is 'No correction required'

91. All the allegations *levelled* against him were found to be baseless
1. levelled against
  2. level with
  3. level against
  4. No correction required
92. He returned with *two* burning mugs of coffee and set them down on her desk
1. heating
  2. steaming
  3. blazing
  4. No correction required
93. On hearing the loud noise, he stopped and *got down* from his bicycle
1. got from
  2. got down
  3. got off
  4. No correction required

61. Where in India is the Centre for DNA Finger Printing and Diagnostics located ?
1. Delhi
  2. Hyderabad
  3. Kolkata
  4. Mumbai
62. Kuchipudi, a dance drama has originated from
1. Gujarat
  2. Andhra Pradesh
  3. Kerala
  4. Orissa
63. Which of the following states in India is landlocked?
1. Orissa
  2. West Bengal
  3. Maharashtra
  4. Haryana
64. The chief producer of jute in India is
1. West Bengal
  2. Karnataka
  3. Tamil Nadu
  4. Assam
65. The judges of the Supreme Court are appointed by the
1. Prime Minister of India
  2. Speaker of the Lok Sabha
  3. President of India
  4. Ministry of Law & Justice
66. The country more than half of which lies below sea level is
1. Sweden
  2. Norway
  3. Netherlands
  4. Kenya
67. When was IMF founded ?
1. 1941
  2. 1913
  3. 1945
  4. 1915
68. The process by which energy is transferred through space is
1. radiation
  2. convection
  3. conduction
  4. none of these
69. Apart from the sun and the moon, the brightest object in the sky is
1. the North Star
  2. Mercury
  3. Venus
  4. Mars
70. The crop which is sown with the commencement of monsoon is
1. rabi crop
  2. kharif crop
  3. cash crop
  4. none of these
71. Which of the following countries awards the Nobel Prize ?
1. USA
  2. UK
  3. Switzerland
  4. Sweden
72. Kalinga Award is given annually by
1. Government of Orissa
  2. Government of India
  3. UNESCO
  4. Jointly by the governments of India and Bangladesh
73. Which instrument was played by Bismillah Khan ?
1. Flute
  2. Tabla
  3. Shehnai
  4. Sarod
74. The first human being to land on moon was
1. Yuri Gagarin
  2. Neil Armstrong
  3. Rakesh Sharma
  4. Alan Bean
75. Which of the following is the only book written by Margaret Mitchell reputed to be one of the largest selling best sellers of all time ?
1. Gone with the Wind
  2. The Three Musketeers
  3. Born Free
  4. Ulysses
76. Who amongst the following is popularly known as queen of ghazals ?
1. Penaz Masani
  2. Chitra Singh
  3. Begum Akhtar
  4. Nur Jehan
77. Which of the following is essentially required to digest the food in stomach ?
1. Air
  2. Water
  3. Enzymes
  4. Minerals
78. Pencillin is given to a patient in order to
1. cure hereditary diseases
  2. cure all diseases
  3. prevent any rise in bodily temperature
  4. prevent the growth of several types of disease-causing bacteria
79. Bile is stored in
1. lungs
  2. kidney
  3. heart
  4. liver
80. Who among the following is the Chairman of the Planning Commission ?
1. Finance Minister
  2. Prime Minister
  3. Vice-president
  4. Home Minister

47. A teacher should know child psychology because it
1. helps in developing self confidence in him
  2. makes him practical
  3. develops feeling of kindness
  4. helps in teaching effectively
48. 'Learning by doing' is useful for children because
1. they understand better by doing
  2. they like doing activities
  3. it keeps them busy
  4. it is interesting
49. Which of the following is the purpose of 'Operation Blackboard' ?
1. To appoint teachers in all primary schools
  2. To provide blackboard in schools compulsorily
  3. To provide minimum crucial facilities in all primary schools
  4. Universalisation of primary education
50. You are teaching in your class and it is almost the end of your session. A child of your class comes late and seeks your permission to enter the class. Being a good teacher, what will you do ?
1. Not permit the child, as it makes little sense coming to class so late
  2. Get annoyed, as you are disturbed
  3. Ask the child to explain his/her position before you take an appropriate decision
  4. Allow him/her to enter and ask him/her the reasons for being so late when the class gets over
51. Today's parents exert a lot of pressure on their children for high achievement because
1. they want to fulfill their dreams through their children
  2. they are scared about their children's future
  3. the world is getting more competitive everyday
  4. the social status is gained only through good grades
52. Which of the following is true for hyperactive children?
1. They need special attention in the classroom
  2. They need a separate classroom
  3. They need special teachers
  4. They need a special curriculum
53. The latest National Curriculum Framework by NCERT came into existence in
- |         |         |
|---------|---------|
| 1. 2000 | 2. 2004 |
| 3. 2005 | 4. 2006 |
54. The school and community should work together as the
1. school is an integral part of the community
  2. community provides resources for learning
  3. community helps in understanding the diverse nature of the students
  4. children learn to cooperate with one another
55. Education Commission (1964-66) which dealt with education as a whole was chaired by
1. Dr. D. S. Kothari
  2. A. L. Mudaliar
  3. Dr. S. Radhakrishnan
  4. Triguna Sen
56. What would be your approach if a student interrupts in your class ?
1. You will ask him to leave the class
  2. You will ask him to behave properly
  3. You will assess the reasons for his behaviour
  4. You will give him extra home-work
57. The main purpose of Parent-Teacher-Association (PTA) in any school is to
1. keep students under control
  2. collect additional funds for remedial teaching
  3. share understanding of the problems faced by school
  4. involve parents for improvement of school functioning
58. Which of the following is the best reason because of which a teacher can command respect from his students ?
1. He follows innovative practices in the class
  2. He dictates notes to the class
  3. He reads and explains the text-book
  4. He does not give home assignment
59. The role of a teacher in childcentred learning is that of
1. an educator
  2. an administrator
  3. a facilitator
  4. an authoritarian
60. Right to Education Act (RTE) came into force on
1. 1st April 2009
  2. 1st April 2010
  3. 4th August 2009
  4. 4th August 2010

31. Black-board can be included in which of the following categories of teaching-aids ?
1. Audio aids
  2. Visual aids
  3. Audio-visual aids
  4. None of these
32. Which of the following was the report submitted by Yashpal Committee in 1993 ?
1. I.C.T. in teacher education
  2. Learning without burden
  3. Learning through broadcasting
  4. None of these
33. Which of the following is the most effective method to modify the undesirable behavior of a student ?
1. Punish the student
  2. Bring it to the notice of parents
  3. Find out the reasons for the undesirable behaviour and provide remedies
  4. Ignore it
34. Environmental education should be taught in schools because
1. it will affect environmental pollution
  2. it is important part of life
  3. it will provide job to teachers
  4. we cannot escape from environment
35. Navodaya schools have been established to
1. increase the number of schools in rural areas
  2. provide good quality education in rural areas
  3. complete 'Sarva Shiksha Abhiyan'
  4. check wastage of education in rural areas
36. The idea of basic education was given by
1. Mahatma Gandhi
  2. Zakir Hussain
  3. Kaka Kalelkar
  4. Jawaharlal Nehru
37. The aim of National Council for teacher education is to
1. open colleges of education
  2. promote research in education
  3. maintain norms and standards in colleges of education
  4. provide grant to colleges of education
38. A guardian never comes to see you in school. You will
1. ignore the child
  2. write to the guardian
  3. go to meet him yourself
  4. start punishing the child
39. Which of the following is most necessary to raise the standard of education ?
1. Continuous evaluation of students
  2. High salary of teachers
  3. Revision of curriculum
  4. Good school building
40. The in-service teacher training can be made more effective by
1. using training package which is well prepared in advance
  2. making it a residential programme
  3. using cooperative approach
  4. practicing training followup procedures
41. If majority of students in your class are slow learners you should
1. not care about the high achievers
  2. keep your teaching slow
  3. maintain your usual speed of teaching
  4. keep your teaching slow along with some extra guidance
42. A new teacher is maltreated in his class. Which of the following will be the best way for him to deal with the students ?
1. Get his class changed after consultation with the Principal
  2. Improve his qualities and present before the students in an effective manner
  3. Punish them
  4. Give them a threat of expulsion
43. A student tries to solve a problem without any help from the teacher. The teacher should
1. pay no attention to him/her
  2. scold him/her for foolishness
  3. offer help to solve his/her problem
  4. appraise his/her individual effort
44. The new education policy was approved by Parliament in
- |         |         |
|---------|---------|
| 1. 1986 | 2. 1982 |
| 3. 1979 | 4. 1977 |
45. Which of the following is the most important work of a teacher ?
1. Maintain discipline in the class
  2. Conduct examination
  3. Check home work
  4. Make teaching interesting
46. Students should be allowed to play games because
1. it develops cooperation amongst them
  2. it inculcates discipline amongst them
  3. it helps in their physical development
  4. all of these

20. If '-' stands for 'division', '+' for 'multiplication', '÷' for 'subtraction' and 'x' for 'addition', which one of the following equations is correct ?

1.  $6 + 20 - 12 \div 7 - 1 = 38$
2.  $6 - 20 \div 12 \times 7 + 1 = 57$
3.  $6 + 20 - 12 \div 7 \times 1 = 62$
4.  $6 \div 20 \times 12 + 7 - 1 = 70$

21. In a city, 40% of the adults are illiterate while 85% of the children are literate. If the ratio of the adults to that of the children is 2 : 3, then what percent of the population is literate ?

1. 20%
2. 25%
3. 50%
4. 75%

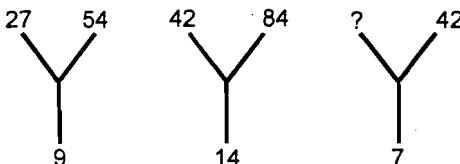
22. On children's Day, sweets were to be equally distributed among 175 children in a school. Actually on the Children's Day, 35 children were absent and therefore each child got 4 sweets extra. Total how many sweets were available for distribution ?

1. 2400
2. 2480
3. 2680
4. 2800

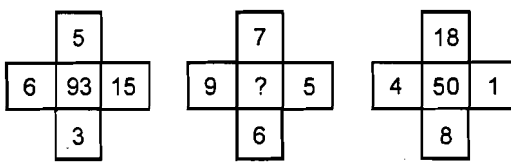
23. Ayush was born two years after his father's marriage. His mother is five years younger than his father but 20 years older than Ayush who is 10 years old. At what age did the father get married ?

1. 23 years
2. 25 years
3. 33 years
4. 35 years

**Direction (Questions 24 to 25) :** In the following questions, a set of figures carrying certain characters is given. Assuming that the characters in each set follow a similar pattern, find the missing character

24. 

1. 12
2. 21
3. 24
4. 35

25. 

1. 5
2. 19
3. 27
4. 89

**Direction (Questions 26 to 27) :** In the following questions below is given a statement followed by two assumptions numbered I and II. You have to consider the statement and the following assumptions and decide which of the assumptions is implicit in the statement. Give Answer (1) if only assumption I is implicit; (2) if only assumption II is implicit; (3) either I or II is implicit; (4) if neither I nor II is implicit

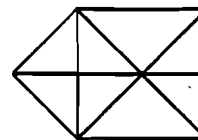
26. **Statement** : Most people who stop smoking gain weight.

- Assumptions :**
- I. If one stops smoking, one will gain weight.
  - II. If one does not stop smoking, one will not gain weight.

27. **Statement** : If it is easy to become an engineer, I don't want to be an engineer.

- Assumptions :**
- I. An individual aspires to be professional.
  - II. One desires to achieve a thing which is hard earned.

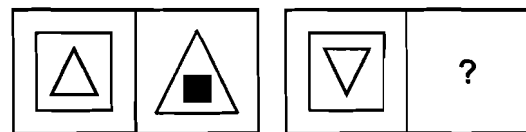
28. How many triangles are there in the following figure



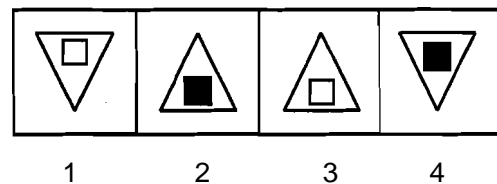
1. 18
2. 16
3. 15
4. 17

**Direction (Questions 29 to 30) :** In these questions there is a relationship between the two figures and on the basis of this relationship select the correct figure from the answer figures

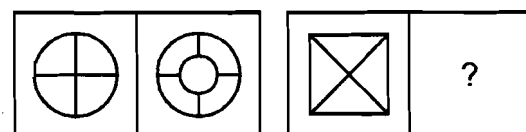
29. **Problem Figures :**



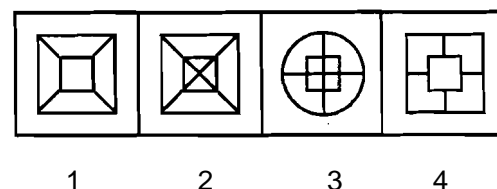
**Answer Figures :**



30. **Problem Figures :**



**Answer Figures :**





**Direction (Questions 1 to 2) :** In the following questions select the right option which indicates the correct code for the word or letter given in the question

- If PHILOSOPHY is coded as HPLISOPOYH, ORNAMENTAL will be coded as
  - ROANEMNTLA
  - ONRAMNEALT
  - ROANEMTNLA
  - ROANEMNATL
- If ADMIRE is coded as AIDRME, then ADORES will be coded as
  - AODRSE
  - ARDESO
  - ARDEOS
  - AREDOS

**Direction (Questions 3 to 5) :** In the following questions one term is missing. Based on the relationship of the given letters/numbers find the missing term from the given options

- PNLJ : IGEC :: USQO : ?
  - HJLN
  - LNJH
  - NWH
  - JHNL
- 23 : 53 :: 17 : ?
  - 66
  - 57
  - 27
  - 19
- 43 : 34 :: 52 : ?
  - 49
  - 25
  - 36
  - 64

**Direction (Questions 6 to 8) :** In the following questions, select the numbers/letters from the given options for completing the given series

- ALWBMXCN ?
  - V
  - W
  - Y
  - X
- 9, 81, 90, 810, 819, ?
  - 7371
  - 900
  - 8100
  - 1638
- 69, 55, 26, 13, ?
  - 3
  - 6.5
  - 13
  - 4

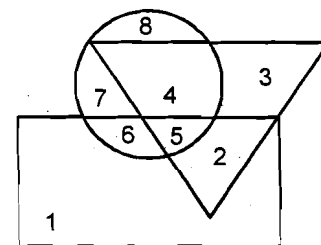
**Direction (Questions 9 to 11) :** In each of the following questions three words/group of letters/numbers are alike in some manner. Choose the odd one out

- Soccer
  - Lawn tennis
  - Billiards
  - Cricket
- BFJQ
  - RUZG
  - GJOV
  - ILQX
- 64
  - 84
  - 16
  - 36

**Direction (Questions 12 to 14) :** In the following questions select the pair which is different from the other three

- Quintal-Gallon
  - Bouquet-Flowers
  - Book-Pages
  - Parliament-Members
- 63, 52
  - 75, 64
  - 80, 69
  - 32, 12
- 42, 14
  - 56, 19
  - 69, 23
  - 108, 36
- Pointing out to a lady, a girl said, "She is the daughter-in-law of the grandmother of my father's only son." How is the lady related to the girl ?
  - Sister-in-law
  - Mother
  - Aunt
  - Mother-in-law
- A postman was returning to the post office which was in front of him to the north. When the post office was 100 metres away from him, he turned to the left and moved 50 metres to deliver the last letter at Shantivilla. He then moved in the same direction for 40 metres, turned to his right and moved 100 metres. How many metres was he away from the post office?
  - 0
  - 90
  - 150
  - 100

**Direction (Questions 17 to 18) :** In the following questions answers are to be based on the diagram given below, where the triangle represents doctors, the circle represents players and the rectangle represents artists



- Which numbered space in the diagram represents doctors who are also players and artists ?
  - 2
  - 3
  - 4
  - 5
- Which number represents artists who are also players only ?
  - 4
  - 6
  - 7
  - 8
- Rajan is sixth from the left end and Vinay is tenth from the right end in a row of boys. If there are eight boys between Rajan and Vinay, how many boys are there in the row ?
  - 23
  - 24
  - 25
  - 26

## B.Ed. Entrance Test - 2013 QUESTION BOOKLET

Maximum Time Allowed : 2 hours  
Negative Marking : 0.2

No. of Questions : 120  
Maximum Marks : 120

Roll No. 

--	--	--	--	--	--

Answer Sheet No. 

--	--	--	--	--	--

### INSTRUCTIONS

**PLEASE READ THE FOLLOWING INSTRUCTIONS CAREFULLY**

1. **Check the booklet thoroughly** : In case of any defect - Misprint, Missing Question(s) or duplication of question(s)/ Page(s) get the booklet changed with the booklet of the same series. No complaint shall be entertained after the entrance test.
2. Write your Roll Number and Answer Sheet No. in the space provided on the Question Booklet and on the OMR Answer Sheet. Incomplete and/or incorrect particulars will result in the non-evaluation of your answer sheet.
3. Strictly follow the instructions given by Centre Supervisor / Room Invigilator and those given on the Question Booklet.
4. Candidates are not allowed to carry any papers, notes, books, calculators, mobile phones, scanning devices etc. in the Examination Hall. Any candidate found using or in possession of such unauthorized material or indulging in copying or impersonation or adopting unfair means / reporting late / without Admit Card will be debarred from the Written Test.
5. Use ONLY blue/black ball point pen for darkening the circles on the OMR Answer Sheet. Use of eraser, whitener (fluid) and cutting on the OMR Answer Sheet is not allowed.
6. The test is of objective type containing multiple choice questions (MCQs). Each objective question is followed by four responses. Choose the correct/best response and mark your response on the OMR Answer Sheet and not in the Question Booklet.
7. Completely darken the CIRCLE so that the number inside the CIRCLE is not visible as shown in the example below.

Correct Method



Wrong Methods



8. Darken ONLY ONE CIRCLE for each answer. If you darken more than one circle, it will be treated as a wrong answer.
9. Mark answer only in the space provided. DO NOT make any stray mark anywhere on the OMR Answer Sheet. DO NOT fold or wrinkle the OMR Answer Sheet. Rough work MUST NOT be done on the answer sheet. Use your question booklet for this purpose.
10. Candidates are provided carbonless OMR Answer Sheet (optical mark reader answer sheet) having original copy and candidate's copy. Candidates are directed to fold at perforation at the top of sheet, tear it after the examination to separate original copy and candidate's copy, hand over the original copy of OMR Answer Sheet to the Room Invigilator and take candidate's copy with you.

DO NOT OPEN THE SEAL OF THIS BOOKLET UNTIL TOLD TO DO SO